

**Holiday  
Homework  
Class  
III**

# SUMMER VACATION

HAPPY  
Holidays

Dear Parents,

- ❖ Long awaited Summer Holidays have commenced. It is a time to relax, rejuvenate, refresh and regain health. It is also a time to reduce stress & increase productivity.
- ❖ Spend quality time with your kids and inculcate values.
- ❖ Help and guide your ward in doing Holiday Homework.
- ❖ Encourage your ward to converse in English.
- ❖ Do some kind of physical exercises with your kids.
- ❖ Read the Newspaper every day and encourage your ward to do so.

**BE HEALTHY, BE HAPPY**

Regards  
GTB-011-46575555

**Guru Tegh Bahadur 3<sup>rd</sup> Centenary Public School**  
**C- Block, Mansarovar Garden, New Delhi -15**  
**Holiday Home Work 2022-23**  
**Class III**

**English**

- Revise lesson 1 and lesson 2 from Communicate With Cambridge (Course Book).
- Learn the poem "I MEANT TO DO MY WORK TODAY."
- Creative work - Prepare a beautiful pictorial sheet (A3 size sheet) depicting compound nouns. E.g. foot + ball = football.
- Complete the given worksheet.

**Hindi**

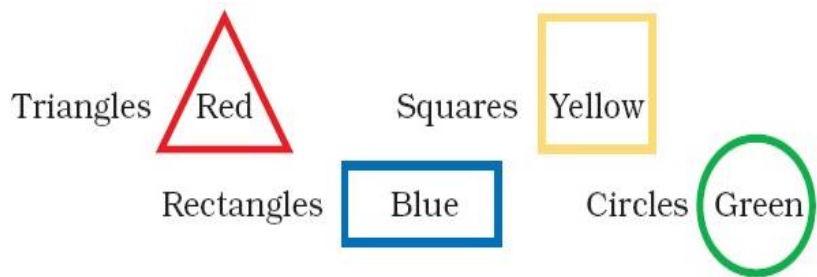

1. रचनात्मक गतिविधि -  
**A4** साइज शीट पर पाँच फूलों के चित्र चिपकाकर नाम लिखो ।
2. सुलेख माला- भाग-3 पेज न. 1 से 10 पुस्तक में पूर्ण करें ।  
**नोट:-** अभ्यास-पुस्तिका और पुस्तक में कराए गए सभी पाठों का अभ्यास करें ।

**Punjabi**

1. ਪਹਿਲੀ ਮਾਸਿਕ ਪ੍ਰੀਖਿਆ (I Monthly Test) ਵਿਚ ਆਉਣ ਵਾਲੇ ਸਿਲੇਬਸ (Syllabus) ਦਾ ਅਭਿਆਸ ਕਰੋ।
2. ਪੰਜਾਬੀ ਦੀ ਕਾਪੀ ਉਤੇ 'ੳ' ਤੋਂ 'ੜ' ਤੱਕ ਲਿਖੋ । (ਪੰਜ ਪੰਨੇ)
3. ਦਿੱਤੇ ਗਏ ਅਭਿਆਸ ਪੱਤਰ ਨੂੰ ਪੂਰਾ ਕਰੋ ।

**Maths**

1. Design a booklet and write tables from 2 to 14.
2. Revise chapters 1 and 2 thoroughly.
3. Mental Mathematics - Revise the pages already done and practice page 18.
4. Make number cards from 0 to 9. Form any 10, 4-digit numbers using the number cards. Write them down in the notebook and also write their number names.
5. Draw plane shapes (circle, square, rectangle, triangle and oval) on a colourful sheet using waste material like-match stick, straws, coloured thread, pencil shavings etc. and write their properties.
6. Make the given clown on an A4 size sheet and colour it in the following directions.



### **EVS**

1. Make any utility item using waste material. (Avoid use of plastic)
2. Make a poster on JUNK FOOD and HEALTHY FOOD.
3. Paste newspaper cutting of any 10 incidents in your EVS notebook.
4. Revise the syllabus of I Monthly Test.

### **Computer**

1. Draw / print pictures of 'Different uses of Computer' on A4 size sheet and paste it in copy.
2. Learn Lesson 1 and 2 for the forthcoming Monthly Test I.

### **GK**

Revise the syllabus shared in the study group.

### **Art**

☞ Do page no.- 20,21,26,30,36. (You have to do all the work in your Art book.)

☞ Draw any one cartoon character and do tearing and pasting activity using florescent sheets and fevistick in your sketch book.

Each activity will be assessed and marks will be given. So complete your work neatly and beautifully.

### **Divinity**

Revise the syllabus shared in the study group.

**Worksheet** - Complete the worksheets of English, Punjabi, Maths, EVS and GK.

**STAY HOME, STAY SAFE**

Name: \_\_\_\_\_ Class &amp; Sec. \_\_\_\_\_ Roll No. \_\_\_\_\_ Date: \_\_\_\_\_

Worksheet

Q1. Rearrange the following group of words and make a meaningful sentence. Also use appropriate punctuation mark:-

a) snake/ green/the/is

\_\_\_\_\_

b) sea/on/ the/sail/ships

\_\_\_\_\_

c) cold/is ice/the

\_\_\_\_\_

d) kick/ball/he /will/the

\_\_\_\_\_

e) mother/my/dropped/school/at/me

\_\_\_\_\_

Q2. Write two proper nouns for each of these common noun:-

a) mountain

\_\_\_\_\_

b) teacher

\_\_\_\_\_

Q3. Write the plural.

a) story

\_\_\_\_\_

c) leaf

\_\_\_\_\_

b) woman

\_\_\_\_\_

d) class

\_\_\_\_\_

Q4. Join the underlined nouns with suitable word from the bracket to make compound noun.

a) My father brought a pen \_\_\_\_\_ to keep them organised. (holder/cutter)

- b) Keep your book \_\_\_\_\_ neat and clean. (shelf/paper)
- c) There is a beautiful family picture in our drawing \_\_\_\_\_. (table/room)
- d) Rohan and his friends are playing foot \_\_\_\_\_.(ball/work)

Q5. Read the following passage and write the answer for the questions that it follows:-

There is a new water park in the town. We go there on the first day of summer. It has pools and water slides. There are sprinklers too. The slides are scary at first.

The sprinklers are cool in hot days. One of the pools makes its own waves. All the kids try to surf the waves. It is really fun.

**Questions**

- a) What is new in town?

---

- b) How are the slides at first?

---

- c) What are cool in hot days?

---

- d) What do kids try to do?

---

**CLASS III**  
**PRACTICE ASSIGNMENT**  
**(NOUNS)**

Name \_\_\_\_\_ Class & Sec \_\_\_\_\_ Roll No \_\_\_\_\_  
Date \_\_\_\_\_

**Q1. Write two proper nouns for each of these common nouns.**

- i) girl \_\_\_\_\_
- ii) car \_\_\_\_\_
- iii) mountain \_\_\_\_\_
- iv) flower \_\_\_\_\_

**Q2. Change the gender of these nouns.**

- i) lion \_\_\_\_\_
- ii) brother \_\_\_\_\_
- iii) nephew \_\_\_\_\_
- iv) uncle \_\_\_\_\_
- v) grandfather \_\_\_\_\_

**Q3. Fill in the blanks with plural form of the nouns given in brackets.**

- i) The \_\_\_\_\_ (child) have \_\_\_\_\_. (book)
- ii) My \_\_\_\_\_ (finger) are larger than yours.
- iii) The \_\_\_\_\_ (student) are sitting in the class.
- iv) I saw \_\_\_\_\_ (mouse) in the store room.

**Class III**

**Subject – Punjabi**

**Name \_\_\_\_\_ Class & Sec \_\_\_\_\_ Roll No. \_\_\_\_\_ Date \_\_\_\_\_**

ਪ੍ਰਸ਼ਨ 1 : ਅੱਖਰਾਂ ਤੋਂ ਬਾਅਦ ਆਉਣ ਵਾਲੇ ਅੱਖਰ ਲਿਖੋ -

1. ਸ \_\_\_\_\_

2. ਗ \_\_\_\_\_

3. ਚ \_\_\_\_\_

4. ਦ \_\_\_\_\_

5. ਰ \_\_\_\_\_

6. ਡ \_\_\_\_\_

ਪ੍ਰਸ਼ਨ 2 : ਦੋ ਅੱਖਰਾਂ ਵਿਚ ਆਉਣ ਵਾਲਾ ਅੱਖਰ ਲਿਖੋ -

1. ਜ \_\_\_ ਞ

2. ਟ \_\_\_ ਡ

3. ਅ \_\_\_ ਸ

4. ਥ \_\_\_ ਧ

ਪ੍ਰਸ਼ਨ 3 : ਅੱਖਰਾਂ ਤੋਂ ਪਹਿਲਾਂ ਆਉਣ ਵਾਲੇ ਅੱਖਰ ਲਿਖੋ -

1. \_\_\_\_\_ ਝ

2. \_\_\_\_\_ ਹ

3. \_\_\_\_\_ ਫ

4. \_\_\_\_\_ ਦ



5. \_\_\_\_ ਫ

6. \_\_\_\_ ਭ


ਪ੍ਰਸ਼ਨ 4 : ਹੇਠ ਲਿਖੇ ਵਰਗ ਵਿੱਚੋਂ ਗਲਤ ਅੱਖਰ ਦੀ ਪਛਾਣ ਕਰਕੇ ਉਸ ਉੱਤੇ ਗੋਲਾ ਲਗਾਉ -

1. ਤ ਥ ਢ ਧ ਨ

2. ਚ ਛ ਠ ਝ ਞ

3. ਓ ਔ ਸ ਹ

ਪ੍ਰਸ਼ਨ 5 : ਚਿੱਤਰ ਦੀ ਪਛਾਣ ਕਰ ਕੇ ਇਸ ਦੇ ਨਾਂ ਦੇ ਪਹਿਲੇ ਅੱਖਰ ਨਾਮ ਮਿਲਣ ਕਰੋ -



ਚ



ਏ



ਗ

**Assignment - 1**

**Q1. Write the number name of the following numerals:**

a. 1101 - \_\_\_\_\_

b. 3003 - \_\_\_\_\_

c. 9999 - \_\_\_\_\_

**Q2. Arrange the following numbers in ascending order.**

a. 1909, 1099, 1990, 1090, 1009

\_\_\_\_\_

b. 3564, 4003, 8732, 8459, 2463

\_\_\_\_\_

**Q3. Arrange the following numbers in descending order.**

a. 7038, 7830, 7308, 7380, 7803

\_\_\_\_\_

b. 2651, 8465, 1945, 7642, 3010

\_\_\_\_\_

**Q4. Compare the following numbers by using the symbol > or < in the blanks:**

a. 3287 \_\_\_\_\_ 5397      c. 3007 \_\_\_\_\_ 3009

b. 5980 \_\_\_\_\_ 5091      d. 6932 \_\_\_\_\_ 6832

**Q5. Circle the largest number and underline the smallest number in the given numbers:**

a. 4532, 2347, 3205, 1653, 2438

b. 1625, 2651, 3661, 6152, 8456

**Q6. Fill in the blanks:**

1.  $1406 + 0 = \underline{\hspace{2cm}} + 0$

2.  $2001 + 154 = 154 + \underline{\hspace{2cm}}$

3.  $54 + 97 + (16 + 4) = 97 + (54 + \underline{\hspace{1cm}}) + 4$

4.  $7116 + 240 + 0 = 0 + \underline{\hspace{2cm}} + \underline{\hspace{2cm}}$

5.  $6717 + (1546 + 845) = 1546 + (\underline{\hspace{2cm}} + 6717)$

**Q7. Write the expanded form of the following numbers:**

a. 4792 = \_\_\_\_\_

b. 8801 = \_\_\_\_\_

c. 9437 = \_\_\_\_\_

**Q8. Write the face value and place value of the underlined digits:**

Number	Face value	Place value
a. <u>4</u> 872	_____	_____
b. 7 <u>7</u> 50	_____	_____

Name : \_\_\_\_\_ Class & Section : \_\_\_\_\_ Date \_\_\_\_\_ Roll No. \_\_\_\_\_

**Q9. Form the greatest and smallest 4-digit number using the given digits:**

Digits	Smallest number	Greatest number
8,1,9,0		
5,7,6,2		

**Q10. There lived many different wild animals in a forest as given below:**

Animal	Number
Elephant	1530
Lions	1150
Tigers	434
Rhinoceroses	2260

**Now, answer the following questions.**

1. How many elephants and rhinoceroses were there in the forest?

\_\_\_\_\_


2. What is the total number of animals in the forest?

\_\_\_\_\_

3. How many lions and tigers were there in the forest?

\_\_\_\_\_

**Q11. Join the points and draw the figures. Now name the shapes:**



\_\_\_\_\_

## Assignment

### Class III

#### Subject- Environmental Studies

Name \_\_\_\_\_ Class & Sec \_\_\_\_\_ Date \_\_\_\_\_ Roll No. \_\_\_\_\_

#### **Q1. Fill in the blanks**

1. The \_\_\_\_\_ organs help us to feel and sense the things around us.
2. \_\_\_\_\_ or \_\_\_\_\_ should be used only in presence of an adult.
3. Food gives \_\_\_\_\_ to body to perform various activities.
4. \_\_\_\_\_ sell fresh fruits and vegetables.

#### **Q2. State True or False**

1. We should not maintain our neighborhood services. \_\_\_\_\_
2. We should wear helmet while travelling on two wheeler. \_\_\_\_\_
3. The tongue helps us to speak. \_\_\_\_\_.
4. Microwave working is the oldest method of cooking. \_\_\_\_\_

#### **Q3. Answer the following questions.**

- a. What is balanced diet?

Ans. \_\_\_\_\_

- b. How do our letters reach us?

Ans. \_\_\_\_\_

- c. Why do some people need artificial limb?

Ans. \_\_\_\_\_

#### **Q4. Give one word answer for the following.**

1. \_\_\_\_\_ is an internal body part.
2. We taste various things with \_\_\_\_\_.
3. Food items like sugar and rice are \_\_\_\_\_.
4. An underground stem that we eat. \_\_\_\_\_.

**Q5. Match the following.**

- |              |                 |
|--------------|-----------------|
| 1. Doctor    | sense organ     |
| 2. Skin      | hospital        |
| 3. First aid | protective food |
| 4. Mango     | first help      |

**Q6. Draw any three road signs and label them.**

**Q7. Draw 2 items for each of the following**

a. Healthy food

b. Junk food

Class - III

Assignment (GK)

Name \_\_\_\_\_ Class & Sec \_\_\_\_\_ Roll No. \_\_\_\_\_ Date: \_\_\_\_\_

1. The current President of India is \_\_\_\_\_?

**Answer:** Ram Nath Kovind

2. Which Indian Cricketer was recently given the 'Padma Vibushan' award?

**Answer:** M S Dhoni

3. Which is India's smallest state?

**Answer:** Goa

4. How many states and union territories are there in India?

**Answer:** There are 28 states and 8 union territories

5. How many languages does the Indian Constitution recognize?

**Answer:** 22

6. . The first "Amrit Sarovar" in India was inaugurated on

**Answer:** 13 May 2022

7. Which is the largest continent?

**Answer:** Asia

8. Who is known as the Father of the Indian Constitution?

**Answer:** Dr B. R. Ambedkar

9. Who is the chief minister of Delhi?

**Answer:** Arvind Kejriwal

10. Who is the Prime Minister of India?

**Answer:** Narendra Modi